

1 Today is Flip a Coin day. The face of a £1 coin has 12 sides. Can you investigate the name of a 12-sided 2D shape?




2

$$\begin{array}{r} 527 \\ + 48 \\ \hline \\ \hline \end{array}$$

3 In the number 15 749 what does the 7 stand for?


4 What number is 800 more than 3200?

5 Today is Hot Air Balloon Day. The world altitude record for the highest hot air balloon flight is twenty one thousand and twenty seven metres.




Write this figure as a number.


6 How many days are there in January?



7 Today is National chocolate ice-cream day. Can you name any 3D objects in the picture???



8 Today is World Ocean Day. Do you know how many oceans there are in the world? Can you name them all?




9 If today is Saturday, what day is it in 3 days?


10

$$\begin{array}{r} 72 \\ - 34 \\ \hline \\ \hline \end{array}$$


11 Write the time shown here in words



12 Today is Red Rose day. How many flowers are in a bouquet of 2 dozen roses?



13 Round 250 grams to the nearest hundred.




14 Today is Flag Day. How many lines of symmetry does this flag have?




15 Write the following in 24 hour time...

4 : 32 am

16 What fraction of this shape is shaded?




17 Today is Eat Your Vegetables Day. If a pupil ate their "five a day" for the month of June, how many pieces of fruit and/or vegetables is this altogether?




18

$$\begin{array}{r} 32 \\ \times 4 \\ \hline \\ \hline \end{array}$$

19 How many 20p's are there in £1.80?



20 Today is National Bald Eagle Day. There are only around 70 000 bald eagles in the whole of North America. Write this figure in words.




21 Write the next two numbers this sequence.

1, 2, 4, 8, ...

22 Calculate


$$220 \div 10$$

23 What is the value of the missing number represented by the shape below?



$$\text{circle} + 2 = 11$$

24 Write the 12<sup>th</sup> of February 1974 as numbers only.



25 Write these numbers in order from the smallest to the biggest:

230, 302, 203, 320

26


$$\begin{array}{r} 3 \overline{) 648} \\ \underline{6} \phantom{00} \\ 0 \phantom{00} \\ \underline{0} \phantom{00} \\ 0 \phantom{00} \end{array}$$

27 Which is bigger? 111 - 77 or 5 x 7 Give a reason for your answer!

28 Is this statement true or false?

$$\frac{1}{4} > \frac{1}{8}$$

29 A schools summer holiday lasts for 6 weeks. How many days is this?



30 It is 8:23 am. Daniel is already missing his maths lessons now that he is on his summer holidays! Rigour Maths have promised to upload the July calendar at 3:48 pm. How long does Daniel have to wait until he can download the July calendar?

